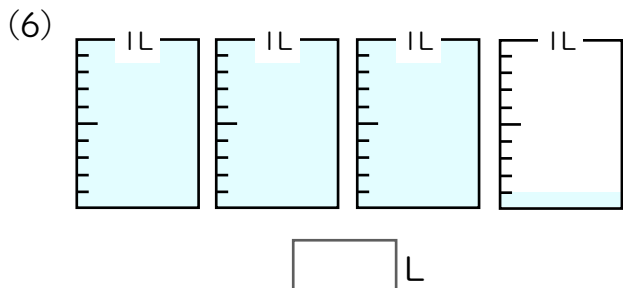
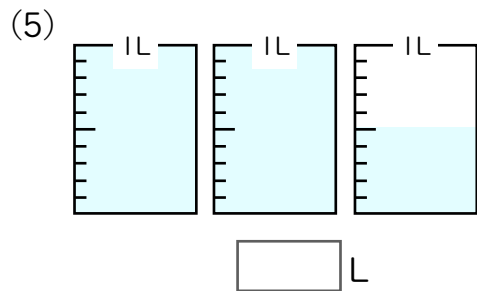
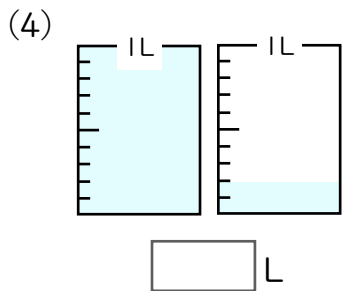
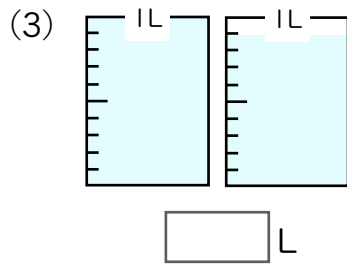
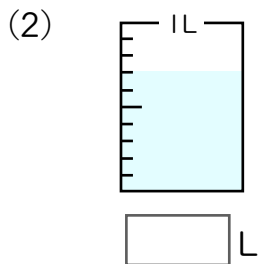
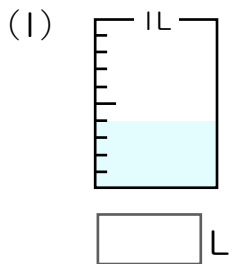




練習問題

1 つぎのかさを小数で表しましょう。



2 にあてはまる数をかきましょう。

(1) $3L = \text{□} dL$

(2) $8L = \text{□} dL$

(3) $2dL = \text{□} L$

(4) $6dL = \text{□} L$

(5) $1L7dL = \text{□} L$

(6) $4L8dL = \text{□} L$

(7) $2.9L = \text{□} L \text{□} dL$

(8) $6.3L = \text{□} L \text{□} dL$